




**Flashback 4** Year 1 | Week 11 | Day 1

1) How much does the pear weigh?

2) Which item is taller, the bottle or the glass?



3) Find an object that is longer than your pencil.


4) Write 7 in words.

White Rose Maths


6

**Flashback 4** Year 1 | Week 11 | Day 2


1) Complete the sentence using full or empty.



The bottle is \_\_\_\_\_ .



2) Which item is lighter, the doughnut or the beans?



3) Find an object that is shorter than your hand.


4) What is  $5 + 7$ ?

White Rose Maths


7

**Flashback 4** Year 1 | Week 11 | Day 3

1) Complete the sentence using **full** or **empty**.

 The glass is \_\_\_\_\_ .

2) Complete the sentence using **peach** and **cherry**.

 The \_\_\_\_\_ is lighter than the \_\_\_\_\_ .

3) What number comes next? 2, 4, 6, 8, \_\_\_\_\_



4) What is one less than 30?

White Rose Maths


8

**Flashback 4** Year 1 | Week 11 | Day 4


1) Which bottle contains more juice? A or B?

A  B 

2) How much do the cherries weigh?



3) How many socks are there altogether?



4) What is 3 less than 11?

White Rose Maths

9

**Flashback 4**

Year 1 | Week 11 | Day 5

1) One bottle of juice fills 5 cups.



How many cups do 2 bottles fill?



2) A pear weighs 5 cubes. An apple weighs 6 cubes.

Which item is the lightest?

3) Which number comes next?

45, 40, 35, 30, \_\_\_

4) Find the total of 12 and 5

